

# Dinosaur Group

Wednesday 6<sup>th</sup> May 2020



# Phonics

## New sound 'air'

- Watch Mr Thorne

<https://www.youtube.com/watch?v=T3rWZYN5jno>

Add in the missing 'air' sound and read the words:



ch \_\_\_\_\_



h \_\_\_\_\_



f \_\_\_\_\_ y



p \_\_\_\_\_



f \_\_\_\_\_

# Reading

Go to Collins connect and enter in the details below

<https://connect.collins.co.uk/school/Portal.aspx>

Go to **Collins Connect** and click on the Teacher portal and enter:

Username: **parents@harpercollins.co.uk**

Password: **Parents20!**

How the bands work


Filter your selection:

Band

- Pink A (22)
- Pink B (22)
- Red A (22)
- Red B (22)
- Yellow (36)
- Blue (37)
- Green (25)
- Orange (26)
- Turquoise (26)

View more

Select yellow books




Key Stage 1 books 28

Progress books

Show 9 books

Click the tab 'progress books'



- **Read the book 'cool cars'**
- **Have a go at the activity.**

# Literacy

Use your noun phrases from yesterday to create sentences.



🔊 🗣️ 👤 ✓ 🗣️  
All around me I can hear...

👤 🗣️ 👤 ✓ 👤  
Under my feet I can feel...

👤 ^ 🗣️  
I can hear...

🗣️ 🗣️ 🗣️ ✓ 🗣️  
In the air I can smell... |

## Noun phrases:

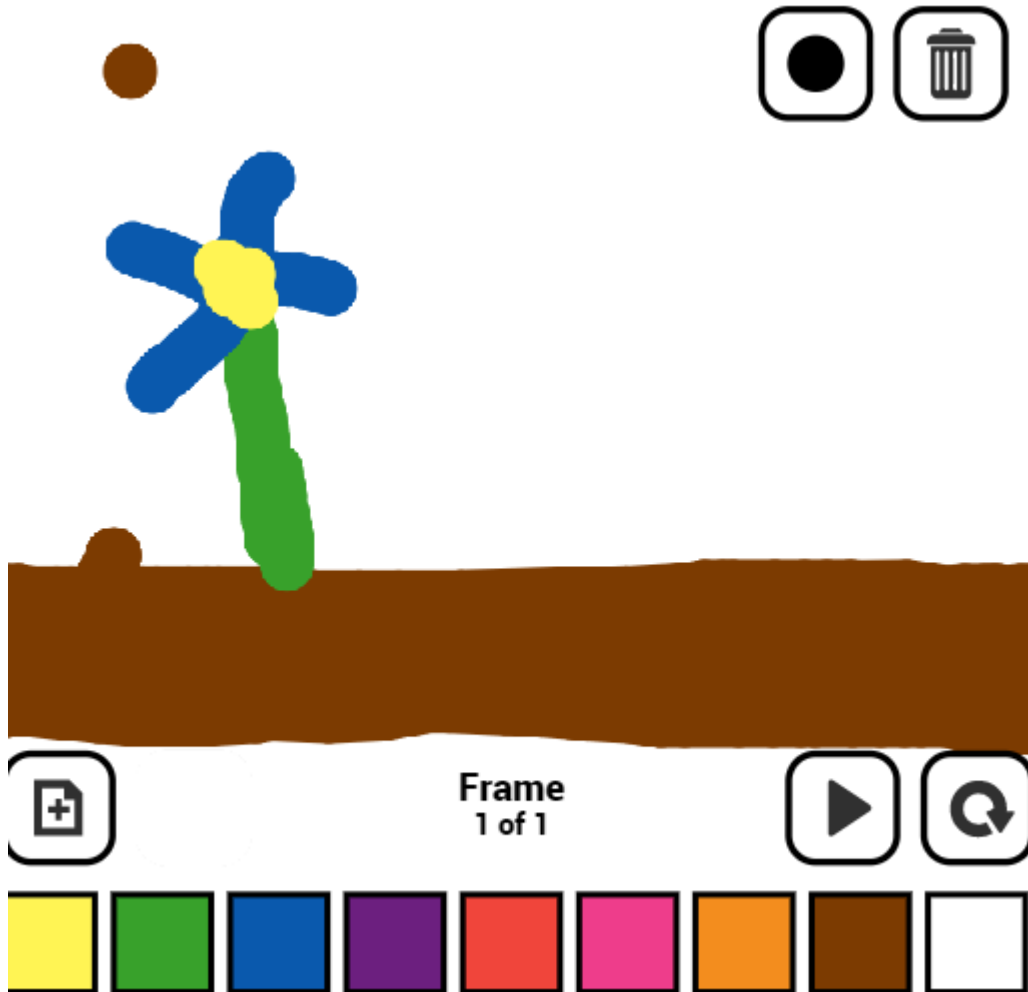
wet moss  
singing birds  
trickling water  
crunchy leaves

For example....

All around me I can hear birds singing.

# Computing- animation

Go to toy theatre <https://toytheater.com/animation-station/>



Create an  
animation of a  
flower  
growing

# Physical Activity

## **Cosmic yoga- space monkeys**

<https://www.google.com/search?q=cosmic+yoga+space+monkey&oq=cosmic+yoga+space+monkey&aqs=chrome..69i57j0j69i61.6733j0j4&sourceid=chrome&ie=UTF-8>

# Maths- Warm up

- I have 3 coins in my pocket.
- All the coins are different
- All together the coins add up to 8p
- What coins to I have?



# Maths

<https://whiterosemaths.com/homelearning/year-1/>

Part-whole relationships number bonds

Number bonds to 10

16:26

9 + 1 8 + 2 7 + 3 6 + 4 5 + 5

**Watch the video**  
**Complete the activities on**  
**the next slide.**



1 Complete the additions to match the ten frames.

a)

●	●	●	●	●
●	●	●	●	●

 $\square + \square = \square$ 

●	●	●	●	●
●	●	●	●	●
●	●	●	●	●
●	●	●	●	●

 $\square + \square = \square$ 

b)

●	●	●	●	●
●	●	●	●	●

 $\square + \square = \square$ 

●	●	●	●	●
●	●	●	●	●
●	●	●	●	●
●	●	●	●	●

 $\square + \square = \square$ 

2 Complete the number bonds.

a)  $4 + 6 = \square$

$4 + 16 = \square$

b)  $5 + 5 = \square$

$5 + 15 = \square$

c)  $10 = \square + 1$

$20 = \square + 1$

d)  $10 = 3 + \square$

$20 = \square + 13$

3 Complete the bar models.

