

Dinosaur Group

Tuesday 9th June



Phonics

Quick read. How many of these words can you read in 1 minute? Have another go and see if you can beat your score.

look, too, for, now, down
will, them, then, that, this,
with, see, I, go, to, no,
into, the, said

Phonics

- Read the sentences and draw a picture to match each one.



She likes her trainers.



He likes to travel on the train.



The traffic light was flashing.

Reading

Go to Collins connect and enter in the details below


<https://connect.collins.co.uk/school/Portal.aspx>

Go to **Collins Connect** and click on the Teacher portal and enter:


Username: **parents@harpercollins.co.uk**

Password: **Parents20!**

- **Read the book 'The King of the Forest' (Green)**
- **Complete the activity on the next slide**





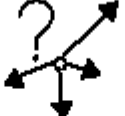






Draw a picture of another animal that could be in the story.
Write what each of the animals is thinking in the thought bubbles.







Literacy- Dragonworld



Write a sentence about where the dragons are going.








   





Where are they going?





The Dragons are going ...

Literacy- Dragonworld



 →      
Write a sentence about how many dragons there are.

   **3** 
Are there only 3 dragons?

    **!**
Or are there more?

I think there are....

Literacy- Dragonworld



Draw

+

and



label



what



you



think



their

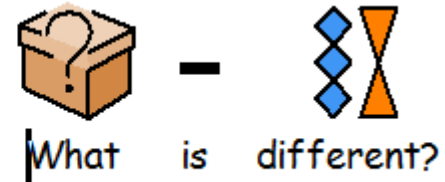
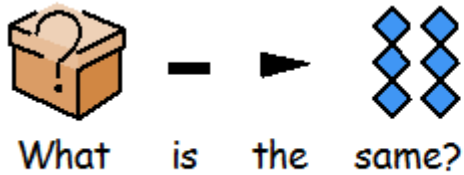


home











looks like.


Science- insects



Insect Art

 create  your own  piece  of  insect  art  work.

 You  can  paint,  draw  or  make.



Physical Activity

PE with Joe




<https://www.youtube.com/channel/UCAxW1XT0iEJo0TYIRfn6rYQ>

Maths- Warm up

- Times tables
- Choose a timetables or number bond to practice
- <https://mathsframe.co.uk/en/resources/resource/399/Archery-Arithmetic-Multiplication>






Maths-compare mass (heavier and lighter)

▶  —  →  ▶



The pencil is lighter than the shoe.



▶  —  →  ▶

The ball is heavier than the flower.





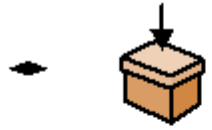





▶  — = —▶  ▶







The apple is equal to the ball.














Activity 1

 First  find  2  objects.

 Then  hold  an object  in  each  hand  and  stretch

 out  your  arms  like  a balance  scale.



 Next  think about  which one  is  heavier  and  which  is  lighter.

 Write  a sentence.





Activity 2


1 Which is heavier? Which is lighter?

 is down and  is up.

 is _____ than .

 is _____ than .



2 Which items are lighter than ? Which items are heavier?



One scale is **balanced**.
I can't see which item
is heavier!

