


Dinosaur Group

Monday 11th May 2020



Phonics

- Revise 'ear' and 'air'

ear	air

Name the objects and put the words in the correct box:



- Spell the year 1 high frequency words in this spooky game:

<http://www.ictgames.com/mobilePage/spookySpellings/index.html>

Handwriting

Letter join: <https://www.letterjoin.co.uk/log-in.html>

Username: Smithy_8

Password: letterjoin

yell

yell

eye

eye

jaw

jaw

jay

jay

Reading

Go to Collins connect and enter in the details below

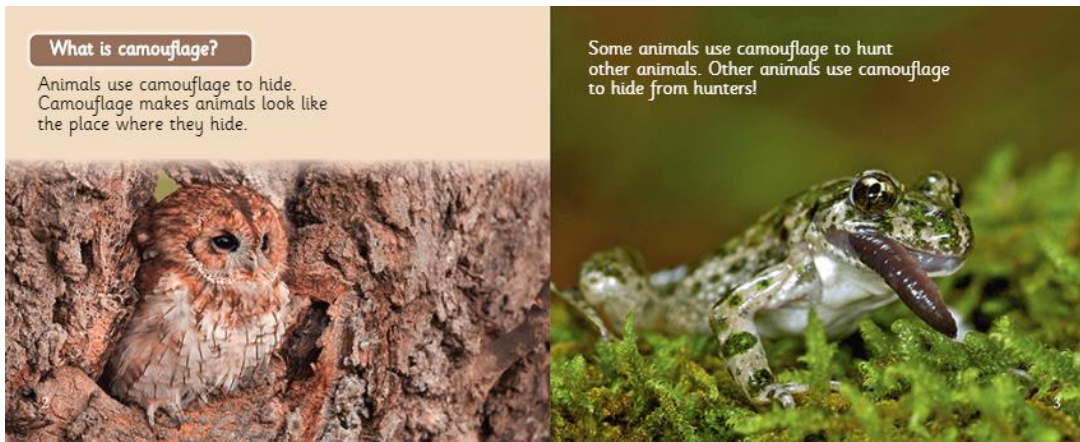

<https://connect.collins.co.uk/school/Portal.aspx>

Go to **Collins Connect** and click on the Teacher portal and enter:

Username: **parents@harpercollins.co.uk**

Password: **Parents20!**

- **Read the book 'Animals in hiding'**
- **Answer these questions:**
 - 1) What is camouflage? Camouflage means....**
 - 2) What are the 2 reasons animals use camouflage?**

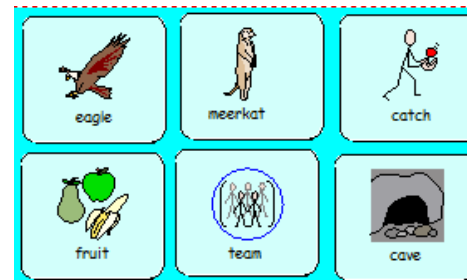


Literacy

Watch the film 'catch it' on literacy shed: <https://www.literacyshed.com/catchit.html>



Order the pictures from beginning to the end. Write a sentence to go with each picture. Here are some words that might help:



Music

Join in with this singing and percussion video
online

<https://www.youtube.com/watch?v=NVVmM2Aqjt0&list=PLy5eTXrBmFRWCbj5XeGLvmUiWg7kpJ4i3>

Physical Activity

PE with Joe and Rosie

<https://www.youtube.com/watch?v=QvWzWqLk8iQ>

Maths- Answers

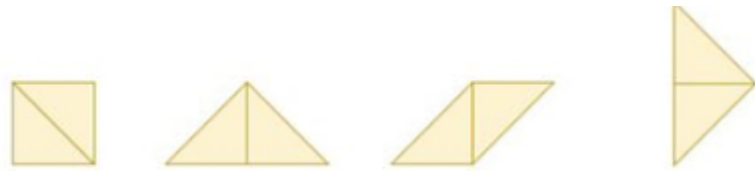
Challenge 1:

 = 10  = 17

Challenge 2:

358, 385, 853 ,835, 583, 538

Challenge 3: 8 Strawberries

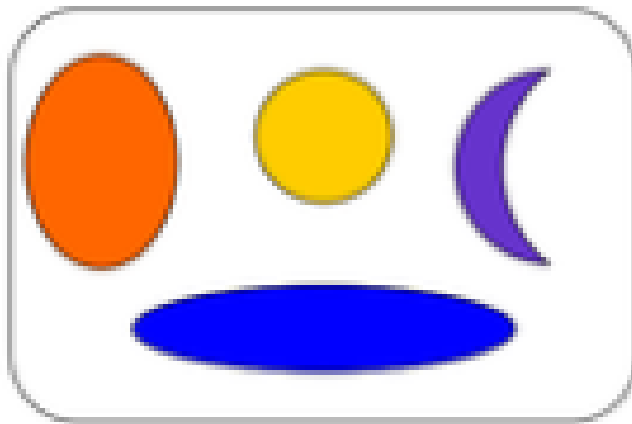

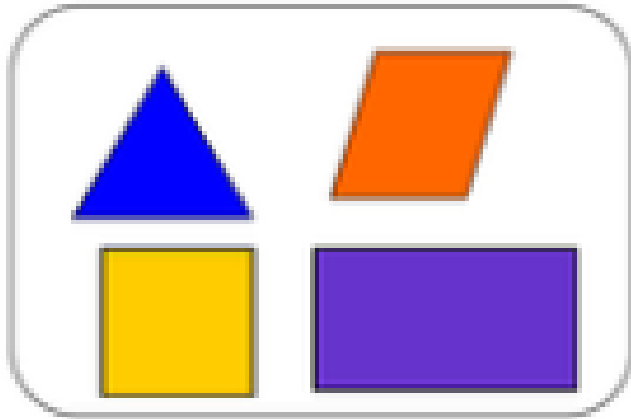


Challenge 4:

$$5p + 7p = 12p$$

Maths- Warm up

Which shape do you think is the odd one out?



I think the... is the odd one out because...

Maths –Fact families

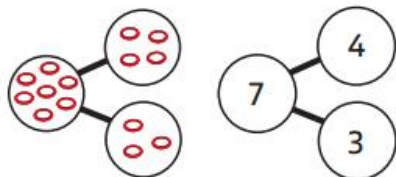
BBC Bitesize <https://www.bbc.co.uk/bitesize/articles/zkd98xs>

1) Watch the 2 videos



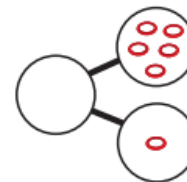
2) Have a go at these questions

1 Leon throws 7 rings.
He scores 4. How many miss?

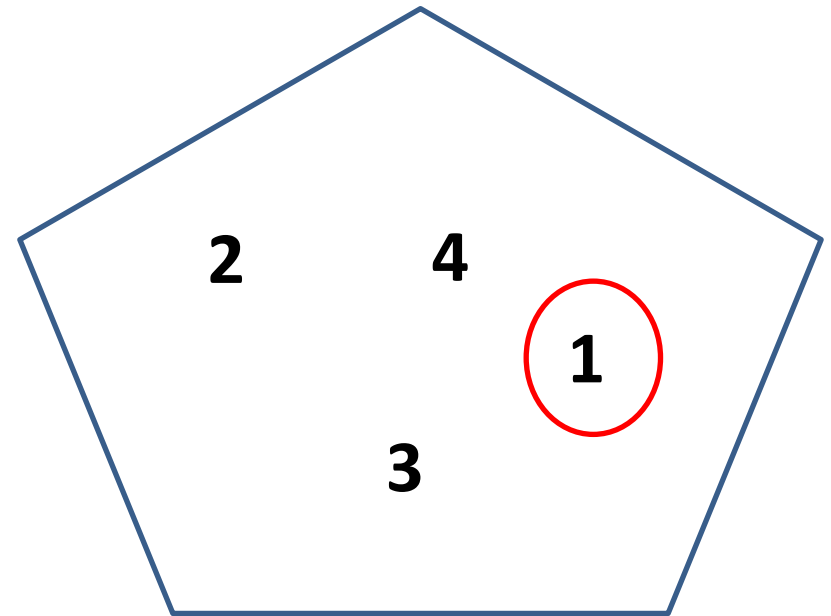
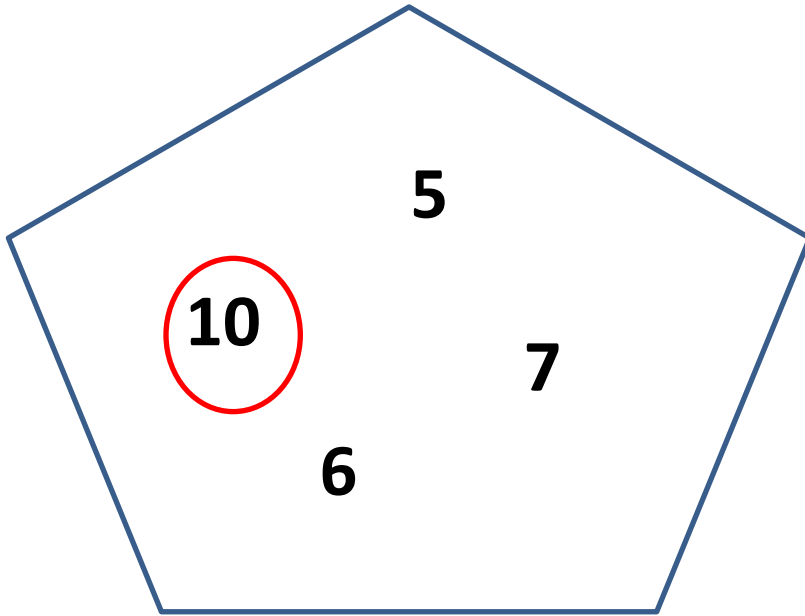


$7 - 4 = \square$
 $\square = 7 - 4$
 \square rings miss.

2 How many rings are there in total?
Find the number sentences to show this fact.



$\square + \square = \square$
 $\square + \square = \square$
 $\square - \square = \square$
 $\square - \square = \square$



Choose a number from each shape and create your own fact family sentences
eg

$$10 + 1 = 11$$

$$1 + 10 = 11$$

$$11 - 10 = 1$$

$$11 - 1 = 10$$

