


Dinosaur Group

Friday 15th May 2020



Phonics

Quick read. How many of these words can you read in 1 minute? Have another go and see if you can beat your score.

look too for now

down he she we

me be was you they

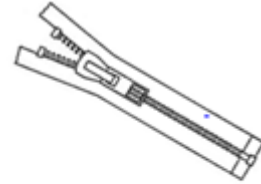
all are my her

Phonics-Revise 'er'

- Match the words to the pictures...

mother numbers swimmer letters
grasshopper teacher zipper butter

1 2 3
4 5 6
7 8 9



a b c d
e f g h
i j k l
m n o p
q r s t
u v w



Reading

Go to Collins connect and enter in the details below

<https://connect.collins.co.uk/school/Portal.aspx>

Go to **Collins Connect** and click on the Teacher portal and enter:

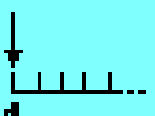
Username: **parents@harpercollins.co.uk**

Password: **Parents20!**

- **Read the book 'The Magic Pen'**
- **Answer the questions on the next slide**

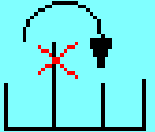


Add a sentence to match the pictures.


First

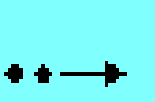


Blank space for writing a sentence.


Next



Blank space for writing a sentence.


Then



Blank space for writing a sentence.


Finally



Blank space for writing a sentence.

Literacy

- Create your own minibeast.
- Draw it
- Label it
- Write a sentence about why it is special.



It is special because...

Think about...

- Colour
- Number of legs
- Wings
- What it eats
- Where it lives
- How many eyes it has
- Does it have a shell?
- Is it stripy or patterned?
- Does it have pincers?

Art and Design

Use some natural materials or junk materials to create your own bug art



You can also look at some art work by Eric Carle and create a bug in the same style.



Physical Activity

PE with Joe

<https://www.youtube.com/channel/UCAxW1XT0iEJo0TYIRfn6rYQ>

Maths- Warm up

- Which number is the odd one out?
- Explain your thinking.

10

8

5





I think because...

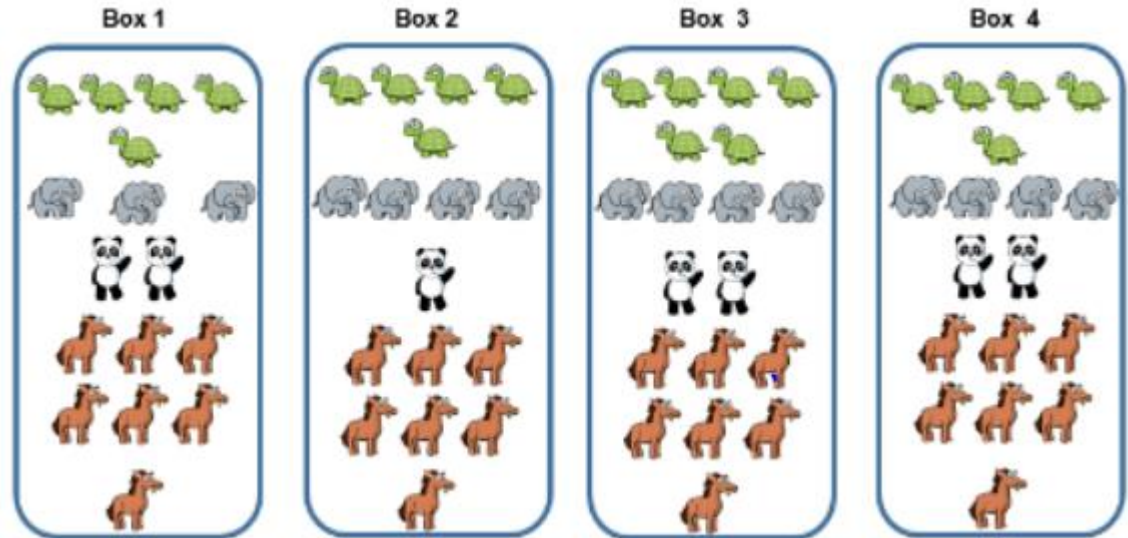
Maths- Data Handling

- Have a go at answering these questions

1.

Dexter makes a tally chart of the animals he saw at the zoo


Animal	Tally
	
	
	
	



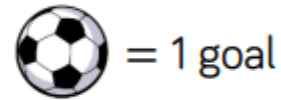
Tick one box below that shows all of the animals Dexter saw and explain why the others are incorrect.

2. Complete the pictogram using the data given.

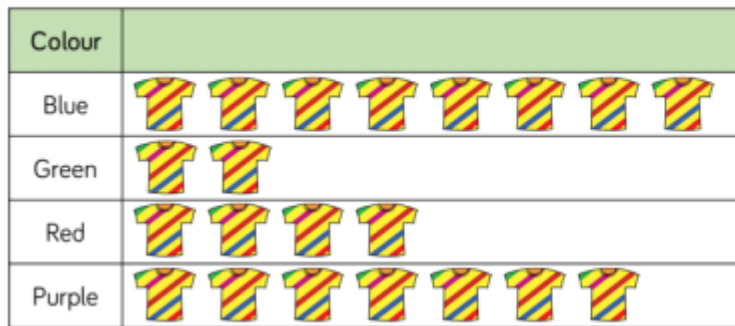
Name	Tally
Teddy	
Annie	
Amir	
Whitney	



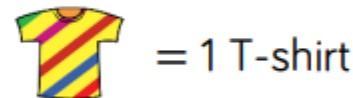
Key



3. Here is a pictogram to show Class 5s favourite t-shirts.



Key



- 1) What is the most popular colour shirt?
- 2) What colour is the least popular shirt?
- 3) How many children liked Red?

Challenge :

- 1) How many children in class 5 altogether?
- 2) How many more people liked blue than green?