

Dinosaur Group

Friday 24rd April 2020



Phonics

- Read the sounds...

ai ee igh oa oo ar or ur

- Read these words...

tall week fight toad root wool jar worn surf

- Read the captions...

Kevin's dad cooks chicken for them on hot coals.

Having food in the wigwam is fun.

Phonics

New sound: 'ow'

Check out Mr Thornes video on the 'ow' sound

[https://www.youtube.com/watch?v=EznhbviF](https://www.youtube.com/watch?v=EznhbviF2w)

[2w](https://www.youtube.com/watch?v=EznhbviF2w)

Read these words...



owl



cow



town



towel

Reading

Choose a book to read from oxford owl

www.oxfordowl.co.uk



Literacy /Art



This is a painting by Frida Kahlo called 'The Bus'. She painted it in 1929.

What do you think about the painting?

What do you like?

What don't you like?

How is it different from the buses in London?

Write your thoughts in your work book.

Art

Create our own piece of art about a bus journey.
You can use junk modelling, paint, pencils or paper.



Physical Activity

PE with Joe Wicks

[https://www.youtube.com/watch?v=QG
YXh_G8X6A](https://www.youtube.com/watch?v=QG
YXh_G8X6A)

Maths

Times tables time!

Answer these as fast as you can.

$5 \times 2 =$

$3 \times 2 =$

$8 \times 2 =$

$4 \times 2 =$

$6 \times 2 =$

$7 \times 2 =$

$9 \times 2 =$

$10 \times 2 =$

$2 \times 2 =$

Maths

Same questions but this time can you answer them faster?

$5 \times 2 =$

$6 \times 2 =$

$4 \times 2 =$

$8 \times 2 =$

$7 \times 2 =$

$9 \times 2 =$



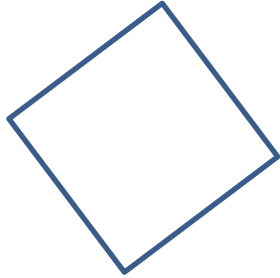
$3 \times 2 =$

$2 \times 2 =$

$10 \times 2 =$

Answer these questions on finding half.

1) Draw these shapes in your workbook and shade in half... c



2) $\frac{1}{2}$ of 4 =

$\frac{1}{2}$ of 10 =

$\frac{1}{2}$ of 8 =

3) If there were 12 cakes and Zoe ate half. How many has she eaten?

