

Dinosaur Group

Wednesday 29th April 2020



Phonics

- Read the sounds...

ai ee igh oa oo ar or ur ow oi

- Read these words...

Fair fleet night board cook car for burn

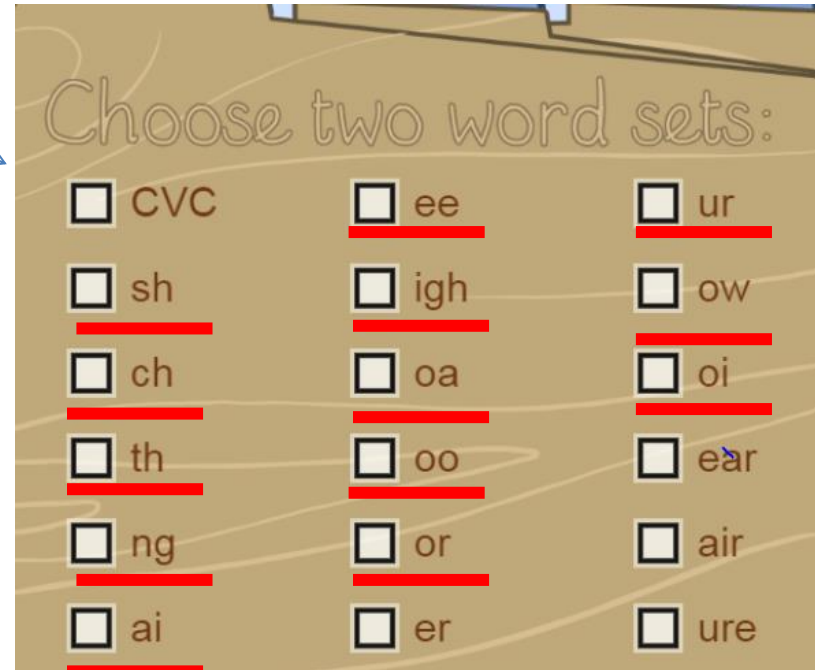
- Write a sentence to match the picture.



Phonics

Use the link to play the phonics game. Read the words and decide if they are real words or made up. **Choose sounds we have already learnt.**


<https://www.ictgames.com/mobilePage/poopDeck/index.html>



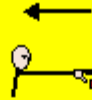
Literacy/oracy



Write some sentences to describe what is happening .



Robot



reached



grabbed



scanned



shot



lasers



people



land

bright red

frightened

strange

slowly


Add adjectives (describing words) to make your sentences more interesting.

Science

Watch the video about the parts of a plant

<https://www.bbc.co.uk/bitesize/topics/zpxnyrd/articles/z3wpsbk>

Draw a plant and label the parts.



Then have a go at the quiz!

<https://www.bbc.co.uk/bitesize/topics/zpxnyrd/articles/z3wpsbk>

Physical Activity

Andy's wild workout in the jungle

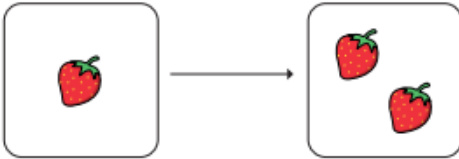
<https://www.youtube.com/watch?v=40Rv00VgCv8>

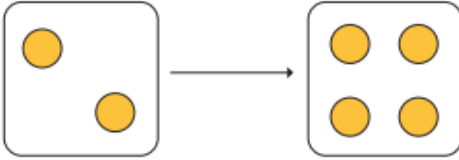
Maths

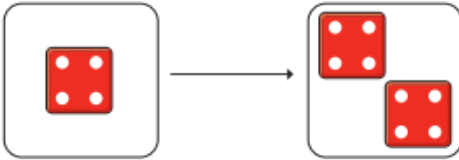
Making Doubles! The answers...

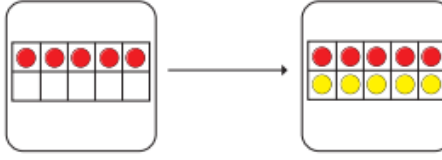
1 Complete the sentences.

Use the pictures to help you.

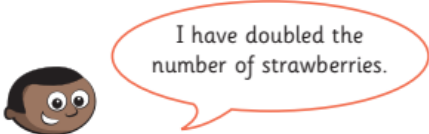
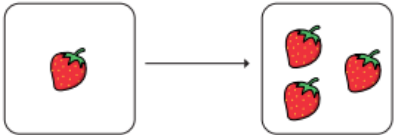
a) 
Double 1 is

b) 
Double 2 is

c) 
Double is

d) 
Double is





4

Do you agree with Mo? No

Talk about it with a partner.

2 Match the doubles to the additions.

Double 3		6 + 6
Double 6		7 + 7
Double 10		3 + 3
Double 7		10 + 10

Recap finding half

- 1 a) Circle half of the pencils.



- b) Complete the sentence.


Half of 6 is

- 2 Colour half of each group.

a)



b)

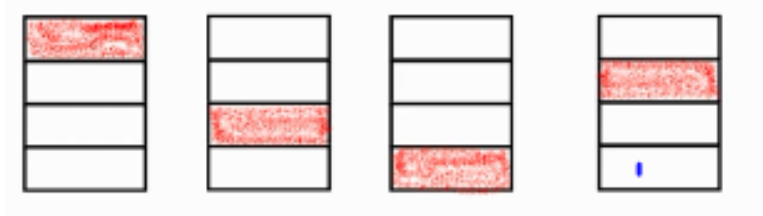


Finding a quarter



Separate the shape into 4 equal parts.

To show one quarter $\frac{1}{4}$ you need to shade in 1 of the 4 equal parts.

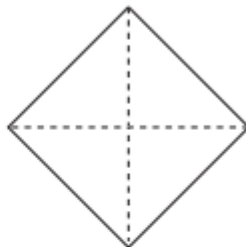
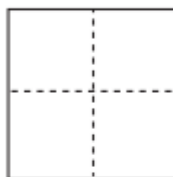
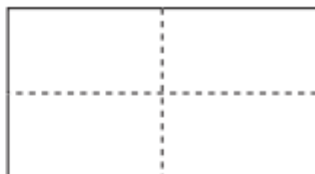
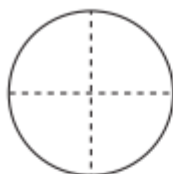


This picture shows how you can shade in $\frac{1}{4}$ of a rectangle in 4 different ways.

Each time 1 of each of the 4 parts has been shaded in.

Have a go...

1 Colour a quarter of each shape.



2 Show a quarter in four different ways.



3 Kim wants to show a quarter.



None of these show quarters.



Do you agree with Kim? _____

Talk about your answer.

4 Tick the shapes that show one quarter.

