

# Dinosaur Group

Thursday 30<sup>th</sup> April 2020



# Phonics

Write sentences using these tricky words. Don't forget the full stop!

he	she	we	me
was	my	you	her
all	our	be	they

---

---

---

---

---

---

# Handwriting

oi

coil

£

# Reading

There are more than 950 different kinds of bat.

Bats can fly.

They have hair or fur on their bodies.

## **Fascinating Facts**

Bats sleep in the day and are awake at night.

Bats can live to be 30 years old.

Bats sleep upside down so they can fly away quickly if they need to.

## **Where Do They Live?**

Bats live in a roost.


They live where it is warm and dark, like in trees and caves.

## **What Do Bats eat?**

Bats in the UK like to eat insects.

They can catch and eat them in the air.

Other bats eat fruit, flowers, fish, frogs, blood and even other bats!



1. How many different types of bats are there in the world?\_\_\_\_\_

---

2. What do bats do in the day??\_\_\_\_\_

---

3. How old can bats live to?\_\_\_\_\_

---

4. Why do bats sleep upside down?\_\_\_\_\_

---

5. Where do bats live?\_\_\_\_\_

---

6. What do bats in the UK eat?\_\_\_\_\_

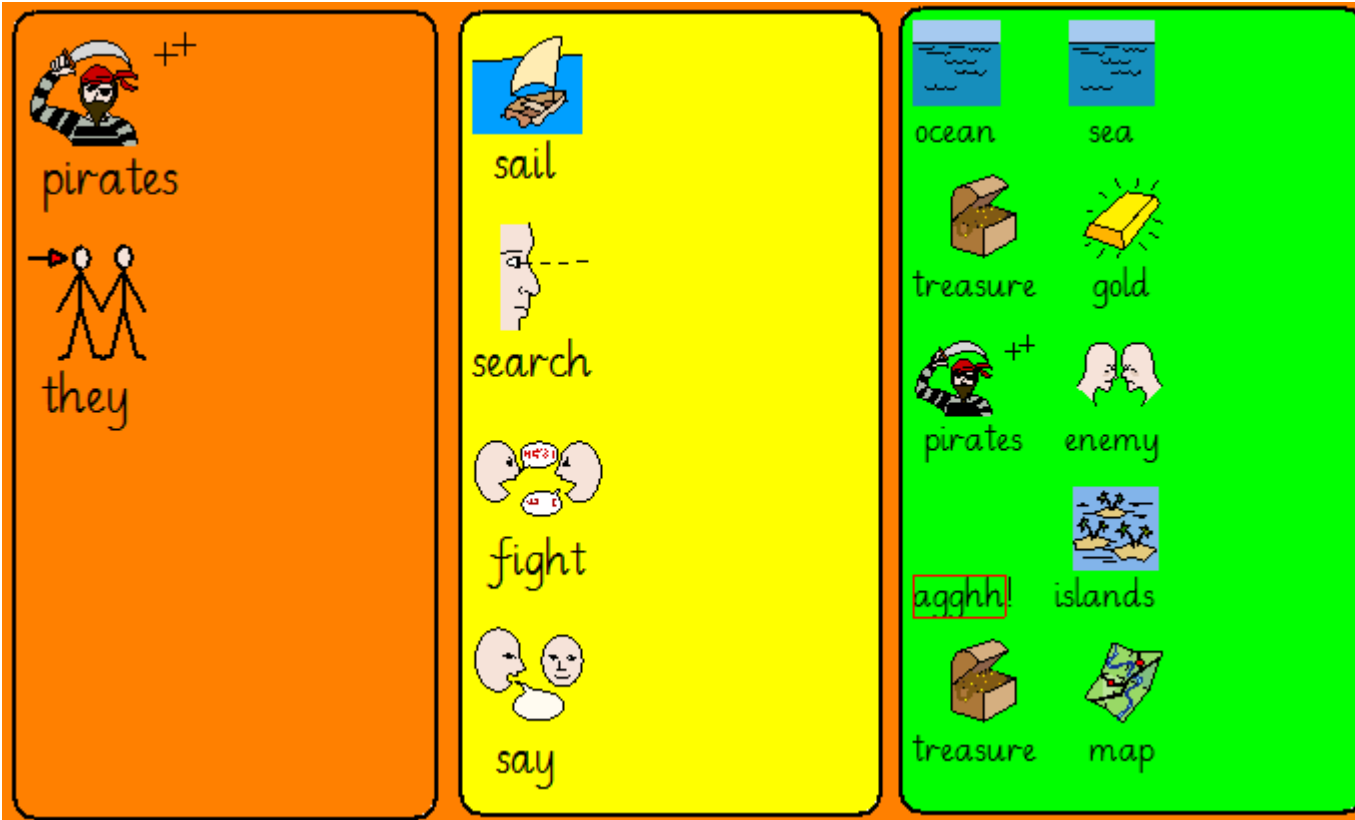
---

# Literacy

Write some sentences to describe a pirate on purple mash.

<https://www.purplemash.com/#app/pup/describeapirate>

Find the smithy portal and log in using the **username:y3** **password:y3**



Add adjectives (describing words) to make your sentences more interesting.

# Computing

How to programme a robot...

<https://www.bbc.co.uk/bitesize/topics/z3tbwmn/articles/zqnc4wx>



# Physical Activity

**Cosmic yoga**

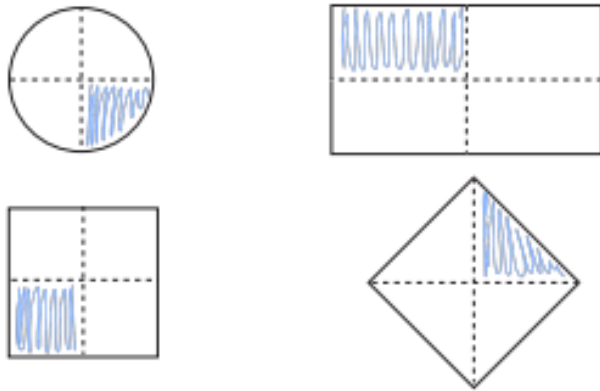
<https://www.youtube.com/watch?v=LZAaZDVqCiA>



# Maths

## Finding quarter! The answers...

1 Colour a quarter of each shape.



3 Kim wants to show a quarter.

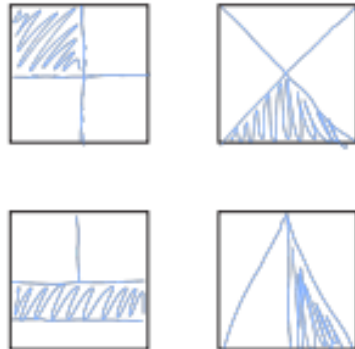


Do you agree with Kim? No

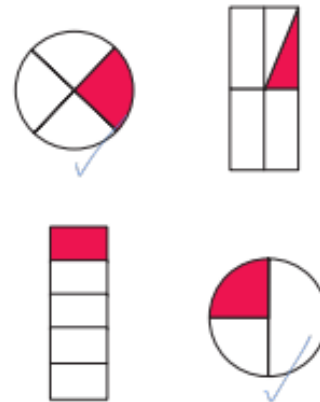
Talk about your answer.

2 Show a quarter in four different ways.

e.g.




4 Tick the shapes that show one quarter.



# Warm up


- <https://www.topmarks.co.uk/money/toy-shop-money>

Menu Give the exact money to buy the toy

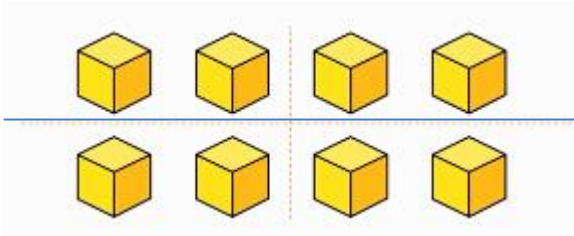


75p

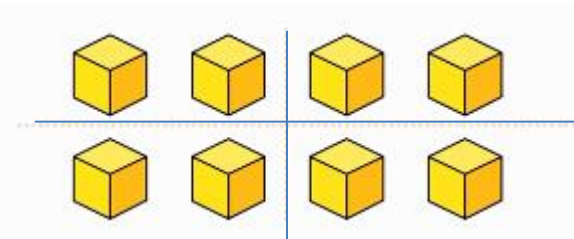
Clear Check



# Finding a quarter

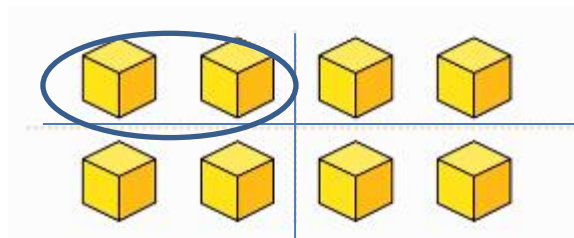


To find a quarter of objects you can first find half.



Then you can add another line to show 4 equal parts  $\frac{1}{4}$ .

Choose one of the 4 equal parts to show  $\frac{1}{4}$  (a quarter).




**One quarter of 8 equals 2**  
 **$\frac{1}{4}$  of 8 = 2**

# Have a go...

1 Circle a quarter of each group.

a)



A quarter of 4 is

b)



A quarter of 12 is

c)



A quarter of 20 is

2 Complete the sentences.

a) Half of 12 is

A quarter of 12 is

b) Half of 16 is

A quarter of 16 is

c) Half of 8 is

A quarter of 8 is

What do you notice?

3 A quarter is 6



What is the whole?

The whole is