

Monday 8th June 2020
Good Morning Year 1
Here are your activities for today

P.E.: <https://www.youtube.com/channel/UCAxW1XT0iEJo0TYIRfn6rYQ>





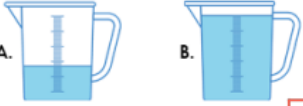


Reading: <https://www.getepic.com/app/read/60565>

Phonics: Today you will be learning the alternative spelling for the 'ow' sound. <https://www.youtube.com/watch?v=-qtCB7CYH3I> Write down as many words with the 'ou' spelling, Write 3 sentences using these words.

English: <https://www.bbc.co.uk/bitesize/topics/zcgv39q/articles/z38t6fr> what are compound words?

Mathematics: <https://www.bbc.co.uk/bitesize/articles/zmytpg8>

Introduce Capacity

<p>1. Circle the correct statement below.</p>  <p>nearly empty nearly full half full</p>	<p>5. Match each jug to the correct label.</p>  <p>half full nearly empty</p>
<p>2. Zara needs a cup that is full.</p>  <p>A. B.</p> <p>Which cup should she choose?</p> <input style="width: 200px; height: 20px;" type="text"/>	<p>6. Jack says,</p>  <p>The jug is nearly full.</p> <p>Is he correct? Explain your answer.</p> <input style="width: 200px; height: 30px;" type="text"/>
<p>3. Put an 'X' next to the correct statement.</p>  <p>A. B.</p> <p>1. B has a greater volume than A. <input type="checkbox"/></p> <p>2. The jugs have an equal volume. <input type="checkbox"/></p>	<p>7. Complete the sentences below.</p>  <p>A. B. C.</p> <p>1. Cup <input type="checkbox"/> has the greatest volume.</p> <p>2. B has a greater volume than <input type="checkbox"/>.</p> <p>3. Cup <input type="checkbox"/> is half full.</p>
<p>4. Choose the correct word card to complete the statement.</p>  <p>is <input style="width: 80px; height: 20px;" type="text"/></p> <p>greater than less than</p>	

Topic: <https://www.bbc.co.uk/bitesize/topics/zpy8q6f/resources/1>
Numbers in French.

<https://www.youtube.com/watch?v=OzKPo3V6CKE> Repeat and say the numbers

Copy the numbers in English and the words in French. Can you find the right word in French to match up with the number?

0	trois
1	neuf
2	quatre
3	un
4	six
5	dix
6	sept
7	zéro
8	cinq
9	huit
10	deux